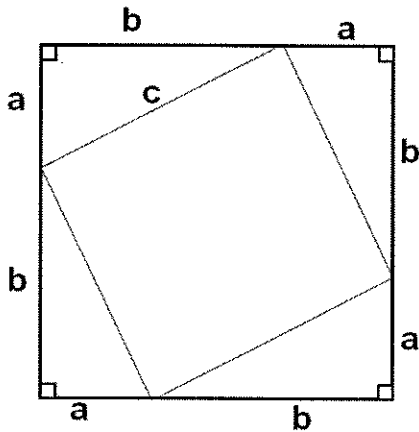


## **PROOF 1**

Below is a visual proof of the Pythagorean Theorem. We can determine why the proof works by doing the following:

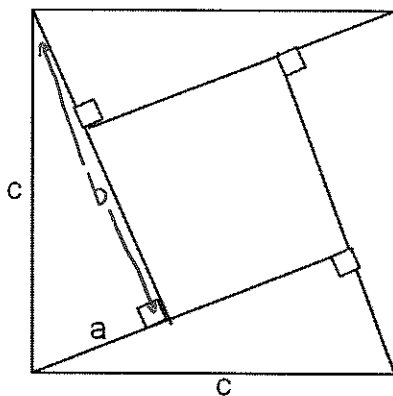


- 1)
  - a. Find the area of each of the 4 right triangles.
  - b. Find the area of the inside square.
  - c. Add all these together and simplify.
- 2)
  - a. What are the side lengths of the big square?
  - b. Find the area of this square and simplify.

3) Set the expressions from #1 and #2 equal to each other. What do you notice?

## **PROOF 2**

Below is a visual proof of the Pythagorean Theorem. We can determine why the proof works by doing the following:

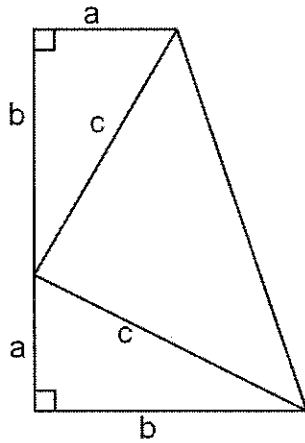


- 1)
  - a. Find the area of each of the 4 right triangles.
  - b. What are the side lengths of the inside square? Find the area of this square and simplify.
  - c. Add all these together and simplify.
- 2) What is the area of the big square?
- 3) Set the expressions from #1 and #2 equal to each other. What do you notice?

Below is a visual proof of the Pythagorean Theorem. We can determine why the proof works by doing the following:

- 1) Determine the area of each of the smaller figures and add them together
- 2) Determine the area of the large figure
- 3) Set these two values equal

### **PROOF 3**



Below is a visual proof of the Pythagorean Theorem. Write a few sentences explaining how this proves the Pythagorean Theorem.

### **PROOF 4**

