

Practice 8-5

Proportions in Triangles

Use the figure at the right to complete each proportion.

1. $\frac{AD}{DG} = \frac{?}{EH}$

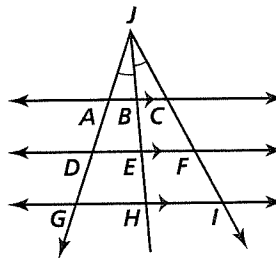
2. $\frac{CF}{BE} = \frac{FI}{?}$

3. $\frac{JA}{JC} = \frac{AB}{?}$

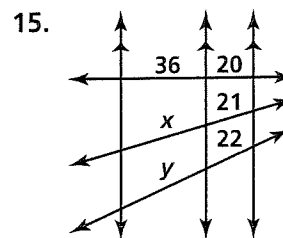
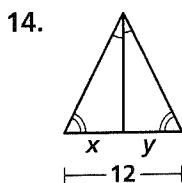
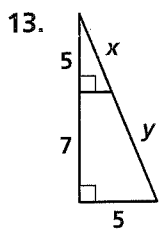
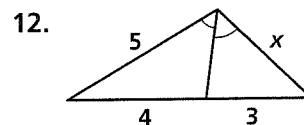
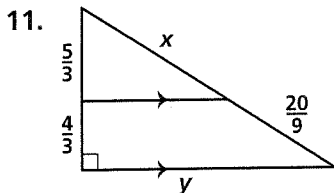
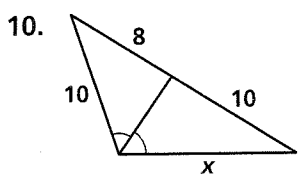
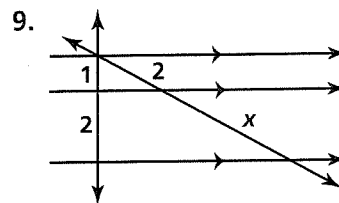
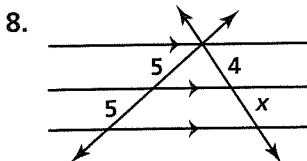
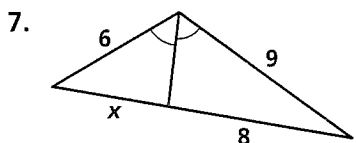
4. $\frac{JF}{FE} = \frac{?}{DE}$

5. $\frac{GH}{HI} = \frac{?}{?}$

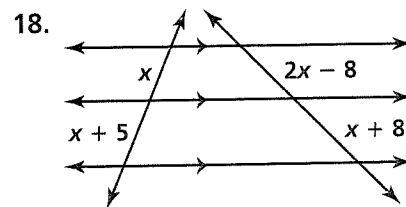
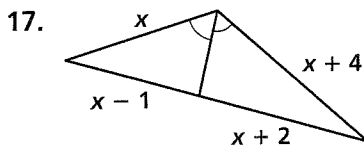
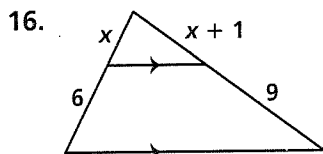
6. $\frac{AD}{AG} = \frac{?}{BH}$



Algebra Find the values of the variables.



Algebra Solve for x.



© Pearson Education, Inc. All rights reserved.