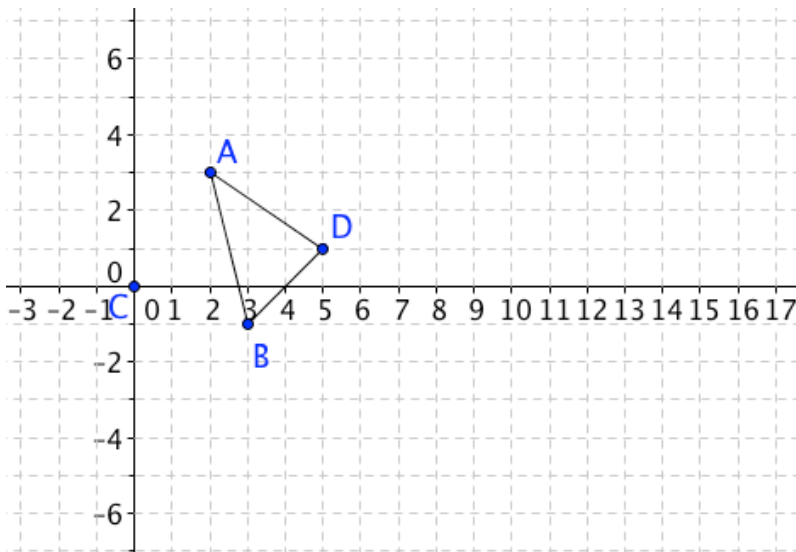


Name: _____

- Multiply the coordinates of ABD by 2 and plot the points, labeling them as A'B'D'
- Connect a segment from C to A', B', and C'
- Write the ratio of $\frac{CA'}{CA}$, $\frac{CD'}{CD}$, and $\frac{CB'}{CB}$
- Put tick marks on the figure to identify which segments are parallel



By multiplying the coordinates by a number, you performed a **dilation**.

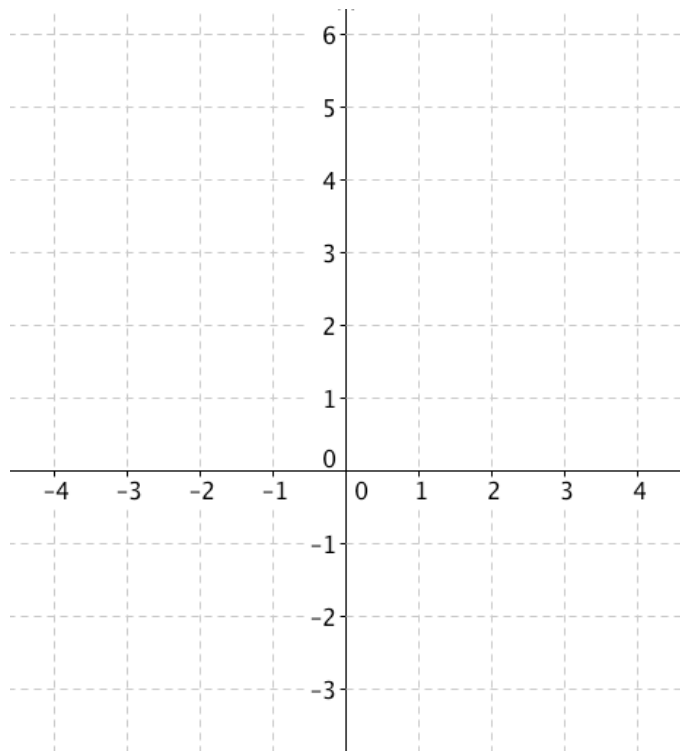
A **dilation** is a transformation in which a figure is enlarged or reduced with respect to a fixed point called the **center of dilation** (in our case, point C), and a scale factor (in our example, 2).

The scale factor is the ratio of the distance from the center of dilation to a point on the image, over the distance from the center of dilation to the corresponding point on the preimage.

When the scale factor is greater than 1, the dilation is an enlargement. When the scale factor is between 0 and 1, the dilation is a reduction.

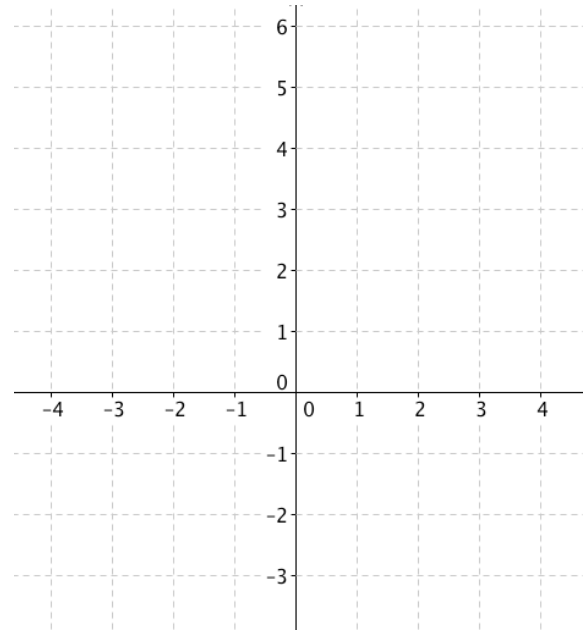
Example: Graph quadrilateral *KLMN* with vertices $K(-3, 6)$, $L(0, 6)$, $M(3, 3)$ and $N(-3, -3)$ and its image after a dilation with a scale factor of $1/3$.

- What is true about the measures of the angles of *KLMN* compared to *K'L'M'N'*?
- What is true about the lengths of the sides of *KLMN* compared to *K'L'M'N'*?
- Is a dilation a rigid motion?



Graph $\triangle FGH$ with vertices $F(-4, -2)$, $G(-2, 4)$ and $H(-2, -2)$ and its image after a dilation with a scale factor of $-\frac{1}{2}$.

- Describe what happens to the dilation when the scale factor is a negative number.

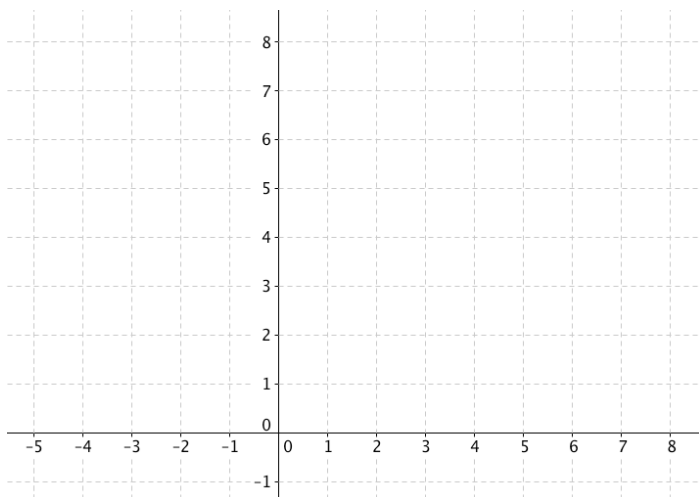


Dilation is an example of a **similarity transformation**. **Similar figures** are the result of similarity transformations that map one figure onto the other. Similar figures have the same shape but not necessarily the same size. Similarity transformations preserve angle measure only.

Graph $\triangle ABC$ with vertices $A(-4, 1)$, $B(-2, 2)$, and $C(-2, 1)$ and its image after the similarity transformation:

Translation: $(x,y) \rightarrow (x+5,y+1)$

Dilation: $(x,y) \rightarrow (2x,2y)$



Describe the similarity transformation that maps trapezoid $ABCD$ to trapezoid $EFGH$.

